

Writing time differently


This task is about writing the time with words and as digital times.

For each clock write down the time it shows by

- filling in the missing **words** (for example **ten past four**)
- writing it with **numbers** (for example 4:10).


This example has been done for you:


Example





i) The time is Ten past Four.


ii) This is the same as 4 : 10.

a)  The time is past
This is the same as : .

b)  The time is past
This is the same as : .

c)  The time is past
This is the same as : .

d)  The time is to
This is the same as : .

e)  The time is to
This is the same as : .