


# Watch your speed

**This task is about reading a speedometer.**

The speedometers show how fast a car is going at a race track.

Look at the speedometers.


Write what speed they are showing.




a) What speed is shown on the speedometer?  km/h




b) What speed is shown on the speedometer?  km/h



c) What speed is shown on the speedometer?  km/h



d) What speed is shown on the speedometer?  km/h



e) What speed is shown on the speedometer?  km/h

Published on *Assessment Resource Banks* (<https://arbs.nzcer.org.nz>)