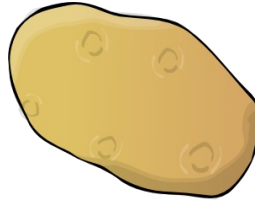


Vegetable Soup

This task is about how many vegetables are left over.




Some friends are making vegetable soup.



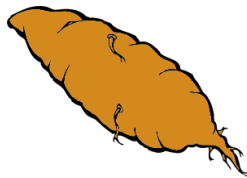
a) Tina has 9 potatoes. She puts 3 into the soup pot.

How many potatoes does Tina have left?



c) Mani has 15 carrots. He puts 6 into the soup.

How many carrots does Mani have left?



b) Nick has 11 kumara. He puts 4 in the soup pot.

How many kumara does Nick have left?