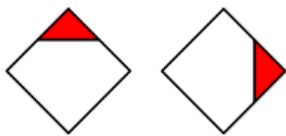


Reflection, rotation and translation II

This resource is about recognising different ways of transforming shapes.

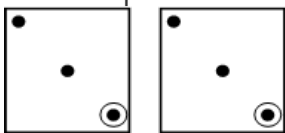
For each drawing, select the word that describes how the first shape has been turned into the second shape.

a) Select the word that describes how the first shape has been turned into the second shape.



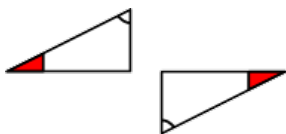
<input type="radio"/>	Reflection
<input type="radio"/>	Rotation
<input type="radio"/>	Translation

b) Select the word that describes how the first shape has been turned into the second shape.



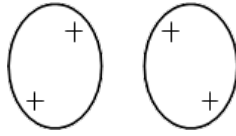
<input type="radio"/>	Reflection
<input type="radio"/>	Rotation
<input type="radio"/>	Translation

c) Select the word that describes how the first shape has been turned into the second shape.



<input type="radio"/>	Reflection
<input type="radio"/>	Rotation
<input type="radio"/>	Translation

d) Select the word that describes how the first shape has been turned into the second shape.

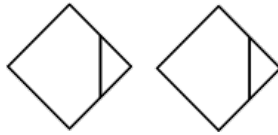


☐ Reflection

☐ Rotation

☐ Translation

e) Select the word that describes how the first shape has been turned into the second shape.



☐ Reflection

☐ Rotation

☐ Translation

f) Select the word that describes how the first shape has been turned into the second shape.



☐ Reflection

☐ Rotation

☐ Translation