

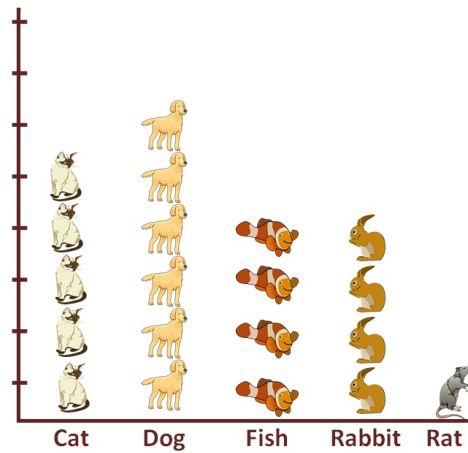
Who says what?

This task is about information in pictographs.


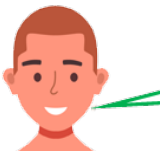
Marama School students made statements about their pictographs.

Look at each pictograph and choose which person made the correct statement.

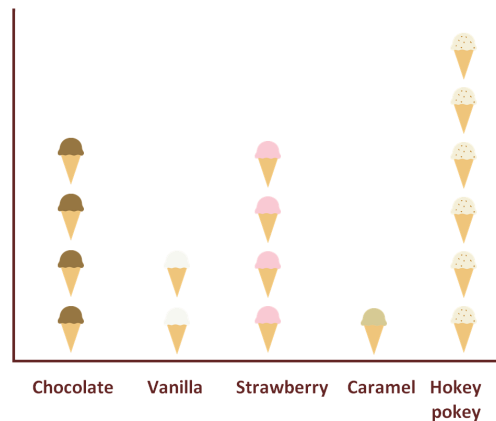
Pets in Kōwhai Class







a) Which student made the correct statement about the pictograph **Pets in Kōwhai Class**?

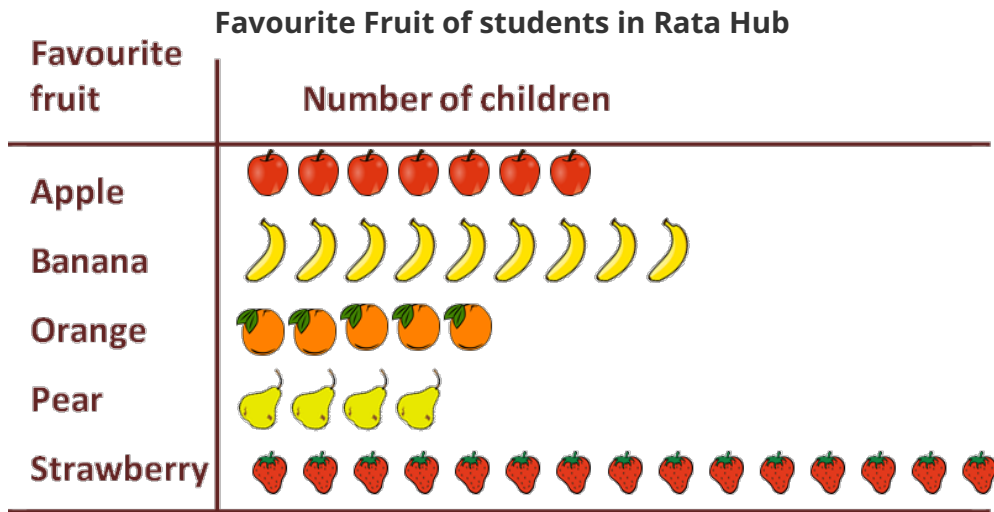
<input type="radio"/>		There are five pet dogs.	<input type="radio"/>		There are more pet cats than pet dogs.
<input type="radio"/>		There are four pet fish and four pet rabbits.	<input type="radio"/>		There are two pet rats.

Ice Cream Flavours that students in Rimu class like







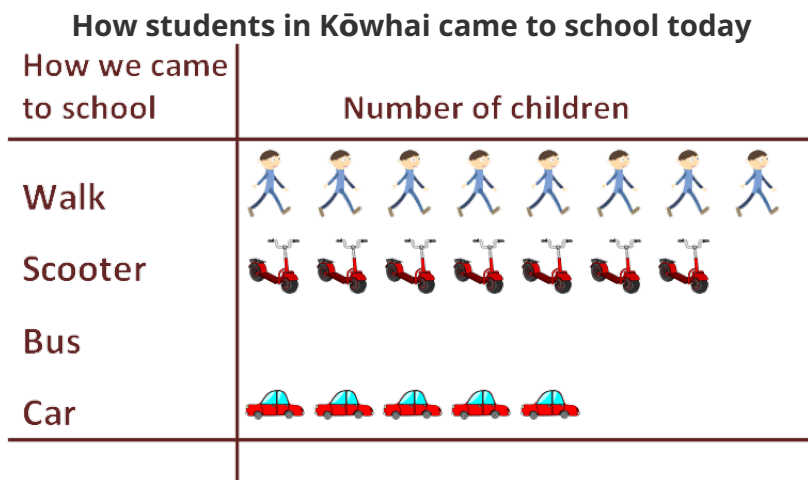
b) Which student made the correct statement about the pictograph above?

<input type="radio"/>		Five children like chocolate ice cream.	<input type="radio"/>		No one in Rimu likes caramel ice cream.
<input type="radio"/>		One child likes vanilla ice cream.	<input type="radio"/>		Hokey pokey is the most liked ice cream flavour.



c) Which student made the correct statement about the pictograph **Favourite Fruit of students in Rata Hub**?

<input type="radio"/>		Pear is the least favourite fruit.	<input type="radio"/>		Banana is the favourite fruit.
<input type="radio"/>		Ten students chose strawberries as their favourite fruit.	<input type="radio"/>		Apples and oranges are equal favourites of students.



d) Which student made the correct statement about the pictograph **How students in Kōwhai came to school today**?

<input type="radio"/>		Ten students walked to school today.	<input type="radio"/>		Three more students walked than came by car today.
<input type="radio"/>		More students came by scooter than walked to school today.	<input type="radio"/>		Five students came to school by bus today.