





Is it a fish? II

This task is about using evidence to classify animals.

Fish have all of these features:

- fins
- gills for breathing
- a tail
- cold blood
- no legs
- a backbone.

Fill in the following table for each animal. Answer Yes or No for each feature. Then use the information above to answer the question "is it a fish?".

Animal Does it have ...	fins?	gills?	cold blood?	legs?	a backbone?	Is it a fish?
	Yes/ No / Not sure	Yes/ No / Not sure	Yes/ No / Not sure	Yes/ No / Not sure	Yes/ No / Not sure	Yes/ No / Not sure
	Yes/ No / Not sure	Yes/ No / Not sure	Yes/ No / Not sure	Yes/ No / Not sure	Yes/ No / Not sure	Yes/ No / Not sure
	Yes/ No / Not sure	Yes/ No / Not sure	Yes/ No / Not sure	Yes/ No / Not sure	Yes/ No / Not sure	Yes/ No / Not sure
	Yes/ No / Not sure	Yes/ No / Not sure	Yes/ No / Not sure	Yes/ No / Not sure	Yes/ No / Not sure	Yes/ No / Not sure

Published on Assessment Resource Banks (<https://arbs.nzcer.org.nz>)