










# Mammal, bird or fish








This task is about identifying animals that are mammals, birds or fish.

Choose all the animals you think are **mammals**.

<input type="checkbox"/> 	<input type="checkbox"/> 	<input type="checkbox"/> 
<input type="checkbox"/> 	<input type="checkbox"/> 	<input type="checkbox"/> 
<input type="checkbox"/> 	<input type="checkbox"/> 	<input type="checkbox"/> 



How do you know they are mammals?

Choose all the animals you think are **birds**.


<input type="checkbox"/> 	<input type="checkbox"/> 	<input type="checkbox"/> 
<input type="checkbox"/> 	<input type="checkbox"/> 	<input type="checkbox"/> 
<input type="checkbox"/> 	<input type="checkbox"/> 	<input type="checkbox"/> 

How do you know they are birds?

Choose all the animals you think are **fish**.


<input type="radio"/> 	<input type="radio"/> 	<input type="radio"/> 
<input type="radio"/> 	<input type="radio"/> 	<input type="radio"/> 
<input type="radio"/> 	<input type="radio"/> 	<input type="radio"/> 

How do you know they are fish?



e) Which of these groups does the penguin belong to?

<input type="radio"/> Mammals	<input type="radio"/> Birds	<input type="radio"/> Fish	<input type="radio"/> None of these groups
-------------------------------	-----------------------------	----------------------------	--



f) Which of these groups does the bat belong to?

<input type="radio"/> Mammals	<input type="radio"/> Birds	<input type="radio"/> Fish	<input type="radio"/> None of these groups
-------------------------------	-----------------------------	----------------------------	--



g) Which of these groups does the whale belong to?

<input type="radio"/> Mammals	<input type="radio"/> Birds	<input type="radio"/> Fish	<input type="radio"/> None of these groups
-------------------------------	-----------------------------	----------------------------	--



h) Which of these groups does the lizard belong to?

- |                               |                             |                            |  |
|-------------------------------|-----------------------------|----------------------------|--|
| <input type="radio"/> Mammals | <input type="radio"/> Birds | <input type="radio"/> Fish | <input type="radio"/> None of these groups |
|-------------------------------|-----------------------------|----------------------------|--|

Published on *Assessment Resource Banks* (<https://arbs.nzcer.org.nz>)