


# Is it possible?


This task is about the probability of things happening.

Circle whether it is **certain**, **possible**, or **impossible** that each of these things will happen.




Your teacher will turn 3 years old tomorrow.

certain / possible /  
impossible  
*(Circle one)*



It will rain next week.

certain / possible /  
impossible  
*(Circle one)*



Tomorrow you will be taller than a house.

certain / possible /  
impossible  
*(Circle one)*



The day after Friday will be Saturday.

certain / possible /  
impossible  
*(Circle one)*



The next coin you find on the footpath will be a 20c coin.

certain / possible /  
impossible  
*(Circle one)*



The next truck that drives down the road will have wheels.

certain / possible /  
impossible  
*(Circle one)*