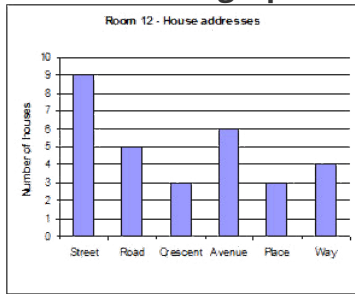


# House addresses

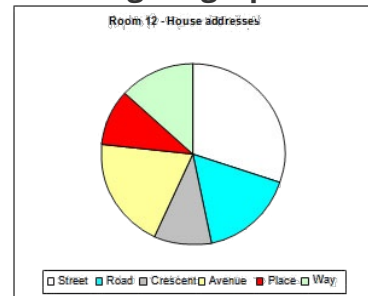
This task is about identifying why a graph may not be suitable to show a given type of data.

Four students drew graphs to show how many students in their class lived on streets, roads, crescents, avenues, places or ways.

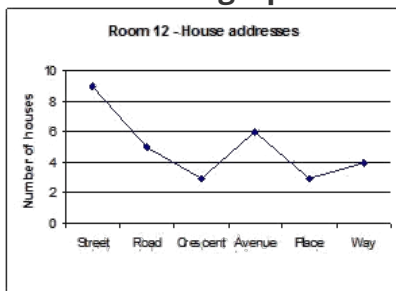
**Miriama's graph**



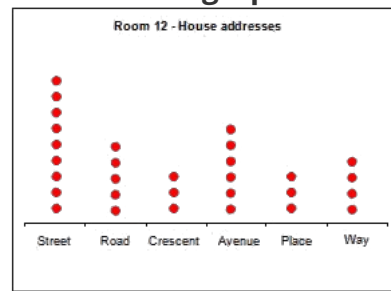
**Nigel's graph**



**Olivia's graph**



**Piri's graph**



Explain why the graph Olivia drew was not suitable to show the data they collected.