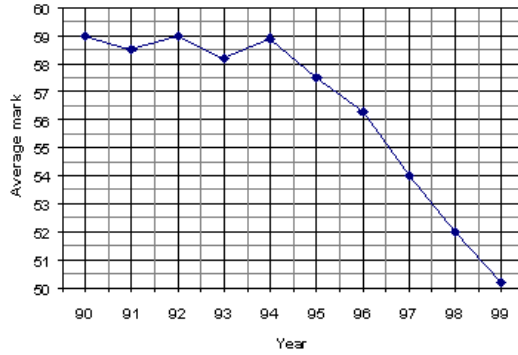


History scores

This task is about describing and comparing graphs of history exam scores.

Each year students from different schools sat a standard history exam.
Each school graphed their average mark for ten years.

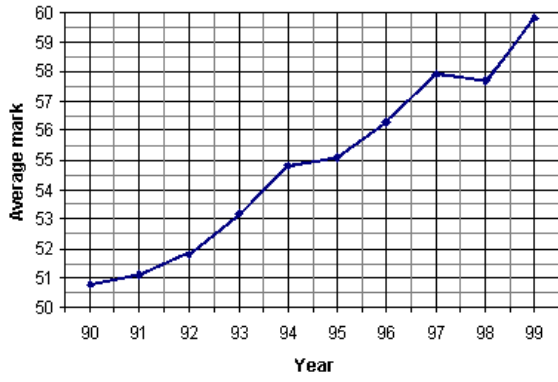
Graph 1: Average history marks at Airlie College



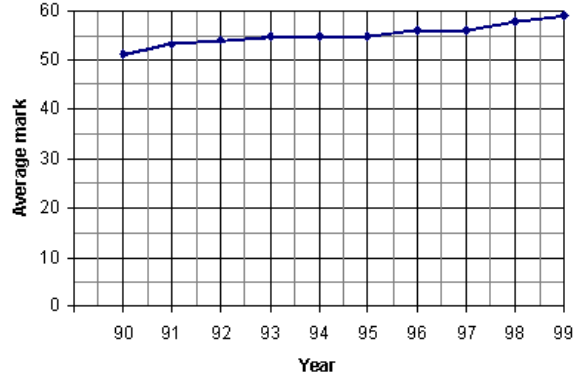
a) Graph 1 shows the results from Airlie College.

Describe how the average mark for history at Airlie College changed over the ten years.

Graph 2: Average history marks at Milbrook College



Graph 3: Average history marks at Hatfield High School



b) Graphs 2 and 3 show the results for Milbrook College and Hatfield High School. Compare how the average marks of the two schools changed over the ten years.