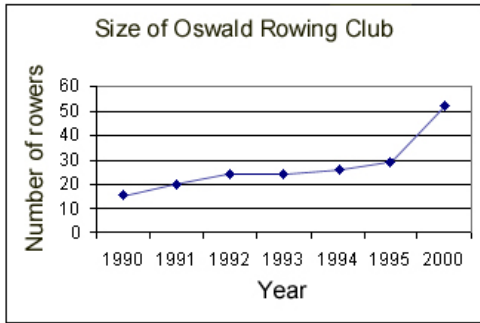


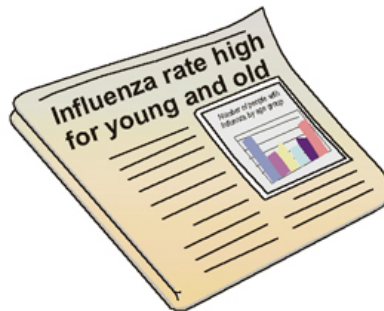
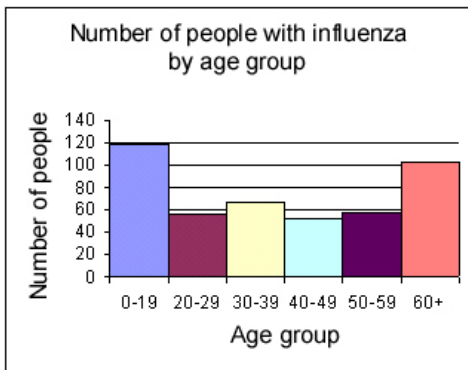
# Newspaper stories

**This task is about how graphs can be misleading.**

The following graphs were found in two newspaper articles. Explain what is misleading about each graph.



a) Explain why this graph is misleading.



b) Explain why this graph is misleading.