

Marbles graph

This task is about reading information from a pictograph.














Some children were playing a game of marbles. This is how many marbles they each had.

	Number of marbles
Sarah	20
Bill	40
Jane	45
Lia	10
Tui	30
Max	15

Finish the pictograph below to show how many marbles Lia, Tui, and Max had.

Remember that each marble drawn  stands for 10 marbles.

Number of marbles each person had: (Each marble drawn stands for 10)	
Sarah	 
Bill	   
Jane	    
Lia	
Tui	
Max	