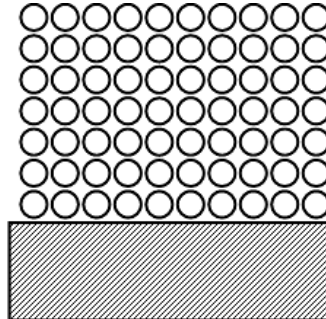


Cover up

This task is about showing how to find out how many counters are covered on an array.

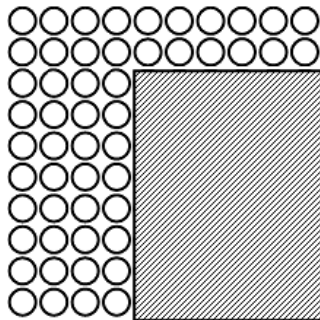
For the questions below there are 10×10 (100) counters and some have been covered.

a) Show how to work out how many counters have been covered.



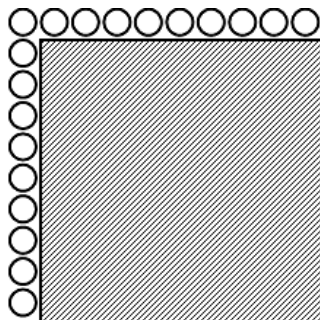
Answer: _____

b) Show how to work out how many counters have been covered.



Answer: _____

c) Show how to work out how many counters have been covered.



Answer: _____