

Making necklaces

This task is about working out decimals.

Complete the table below to give the number of each coloured bead in each necklace.

Instructions to make each necklace




| | | |
|--|--|---|
| <p>Necklace A</p>  <p>Total of 20 beads of which</p> <ul style="list-style-type: none">• 0.1 are red• 0.6 are blue• 0.3 are green | <p>Necklace B</p>  <p>Total of 20 beads of which</p> <ul style="list-style-type: none">• 0.15 are red• 0.6 are green• 0.25 are black | <p>Necklace C</p>  <p>Total of 25 beads of which</p> <ul style="list-style-type: none">• 0.6 are red• 0.08 are blue• 0.2 are green• 0.12 are black |
|--|--|---|

Table to Record Answers

| | Necklace | | |
|------------------------------|----------|---|---|
| Number of each coloured bead | A | B | C |
| Red | | | |
| Blue | | | |
| Green | | | |
| Black | | | |