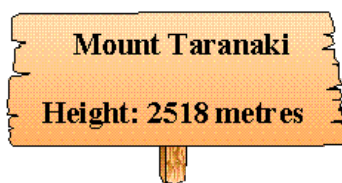
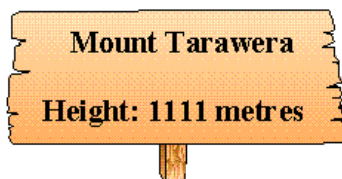


Mountain heights

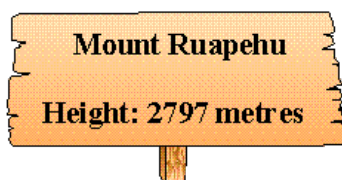
This task is about rounding whole numbers.



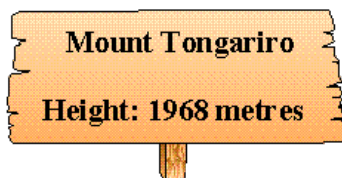
a) What is the height of Mount Taranaki rounded to the nearest **10 metres**? _____m



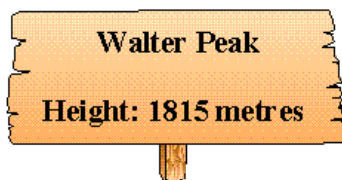
b) What is the height of Mount Tarawera rounded to the nearest **100 metres**? _____m



c) What is the height of Mount Ruapehu rounded to the nearest **10 metres**? _____m



d) What is the height of Mount Tongariro rounded to the nearest **100 metres**? _____m



e) What is the height of Walter Peak rounded to the nearest **10 metres**? _____m