


Shopping for vegetables


This task is about estimating in division problems.

Broccoli




\$3.85

Corn cob



\$0.95 each

Taro



\$9.35

- a)i) Billy has \$12. How many corn cobs can he buy? _____
ii) Show how you did this in the box below.

- b)i) Aroha has \$20. How many broccoli can she buy? _____
ii) Show how you did this in the box below.

- c)i) Maraea has \$72. How many taro can she buy? _____
ii) Show how you did this in the box below.