



Fractions of sets

This task is about finding fractions of sets of objects.


a) Write what fraction of objects has been circled.



b) Write what fraction of objects has been circled.



c) Write what fraction of objects has been circled.



d) Write what fraction of objects has been circled.



e) Write what fraction of objects has been circled.

