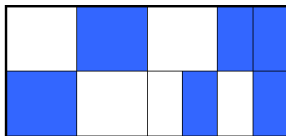


Shaded fractions

This task is about working out how much of a shape has been shaded.

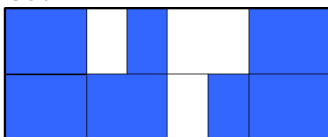
Work out what fraction of each rectangle is shaded and write the fraction under it.

a) What fraction of the rectangle is shaded?



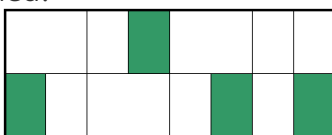
—

b) What fraction of the rectangle is shaded?



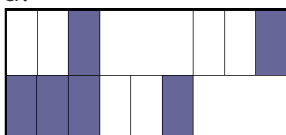
—

c) What fraction of the rectangle is shaded?



—

d) What fraction of the rectangle is shaded?



—