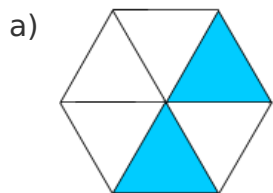


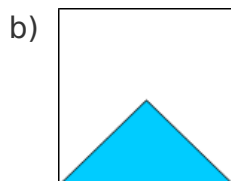
Fraction shapes II

This task is about working out what fraction of a shape is shaded.

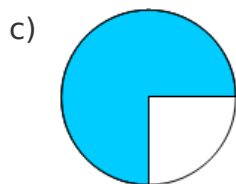
Write down what fraction of each shape is shaded.



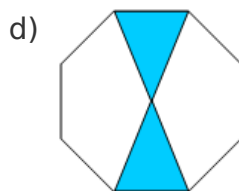
Fraction shaded _____



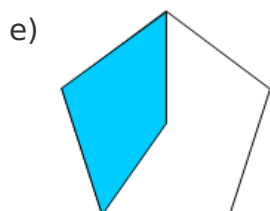
Fraction shaded _____



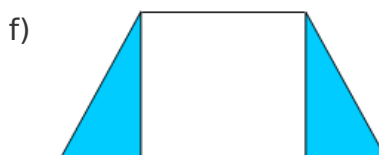
Fraction shaded _____



Fraction shaded _____



Fraction shaded _____



Fraction shaded _____