

Sharing shapes


This task is about drawing lines to share some shapes equally.

For each shape below, draw lines to show how to share the shape equally.

a) i) Draw lines to show how to share this square equally between 3 people.

a)

ii) What fraction would each person get? _____



Draw lines to show how to share the rectangle below equally between 9 people.

b)i)

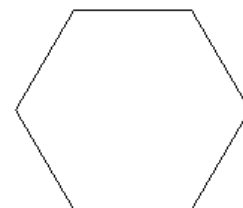


ii) What fraction would each person get? _____

i) Draw lines to show how to share this hexagon equally between 3 people

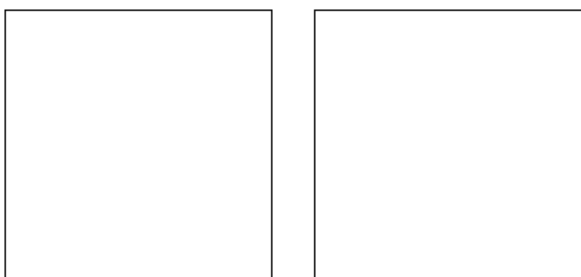
c)

ii) What fraction would each person get? _____



Draw lines to show how to share these two squares equally between 5 people.

d)i)



ii) What fraction of a square would each person get? _____