

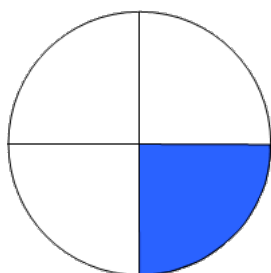
Shaded Fractions II

This task is about working out how much of a shape has been shaded.

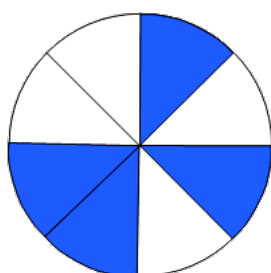
Work out what fraction of each whole shape is shaded and write the fraction beside the shape.

What fraction of the shape is shaded?

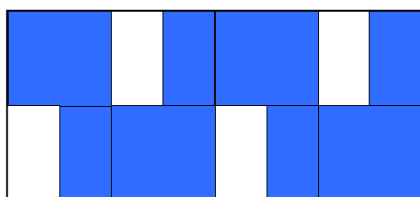
a)


—

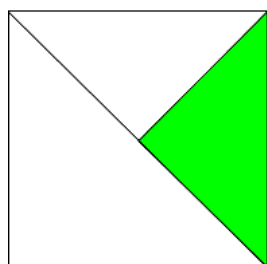
b)


—

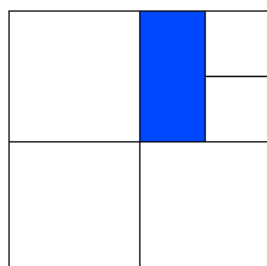
c)


—

d)


—

e)


—