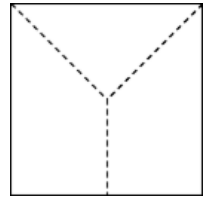


Cutting up


This task is about cutting a square and a circle into equal parts.

1) Alli drew lines to divide this square into 3 equal-sized pieces.

a) Are all 3 pieces equal-sized? **yes** / **no** / **don't know** (*Circle one*)

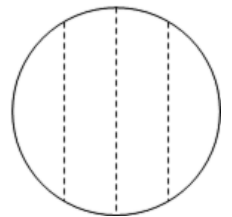


b) Show how you would divide the square into 3 equal-sized pieces.



2) Josef drew lines to divide this circle into 4 equal-sized pieces.

a) Are all 4 pieces equal-sized? **yes** / **no** / **don't know** (*Circle one*)



b) Show how you would divide the circle into 4 equal-sized pieces.

