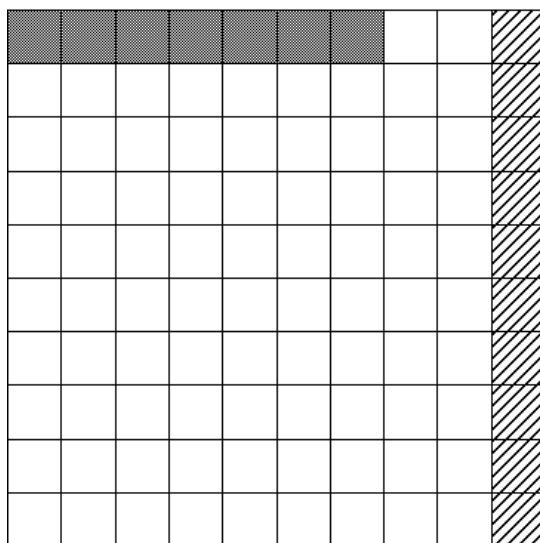




# What part of the grid?

This task is about percentages and decimal fractions.



- a) What percentage of the large square above is shaded like this  ?
- (A) 1%  
(B) 5%  
(C) 10%  
(D) 15%  
(E) None of these. The answer is \_\_\_\_\_.
- b) What percentage of the large square is not shaded in any way?
- (A) 70%  
(B) 74%  
(C) 79%  
(D) 83%  
(E) None of these. The answer is \_\_\_\_\_.
- c) What decimal fraction of the large square above is shaded like this  ?
- (A) 0.7  
(B) 0.07  
(C) 0.007  
(D) 7  
(E) None of these. The answer is \_\_\_\_\_.