






Different number system II






This task is about using a different number system to work out numbers.







On the planet Efilar they have their own symbols for numbers.

| | | | | |
|---|---|---|---|---|
|  |  |  |  |  |
| 10,000 | 1,000 | 100 | 10 | 1 |

a) Write each of these Efilar numbers in our number system.

i)      |||||

Number: _____

ii)    

Number: _____

b) Show each of these numbers in the Efilar system.

i) 2,316

ii) 30,050