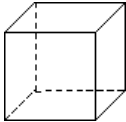





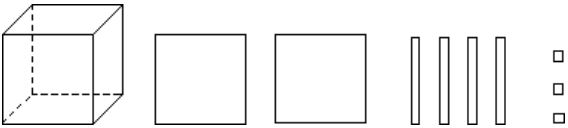
Place value blocks II

This task is about place value.

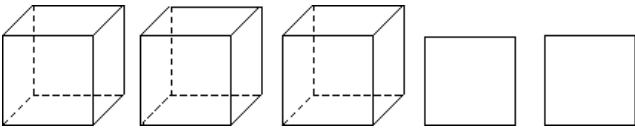
These are place value blocks.

			
1 000	100	10	1

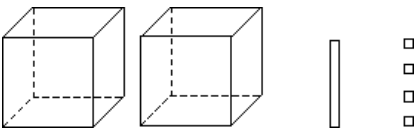
Write the number shown by each set of blocks below in the space provided.

a) 

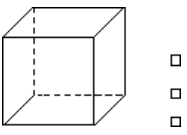
Number: _____

b) 

Number: _____

c) 

Number: _____

d)  Number: _____