



What fraction?

This task is about the fraction of something coloured in.




a) What fraction of these pears is coloured in? *(Select the correct answer)*

| | | | |
|-------------------------------------|-------------------------------------|-------------------------------------|-------------------------------------|
| <input type="radio"/> $\frac{1}{2}$ | <input type="radio"/> $\frac{1}{3}$ | <input type="radio"/> $\frac{1}{4}$ | <input type="radio"/> $\frac{1}{5}$ |
|-------------------------------------|-------------------------------------|-------------------------------------|-------------------------------------|



b) What fraction of these apples is coloured in? *(Select the correct answer)*

| | | | |
|-------------------------------------|-------------------------------------|-------------------------------------|-------------------------------------|
| <input type="radio"/> $\frac{1}{2}$ | <input type="radio"/> $\frac{1}{3}$ | <input type="radio"/> $\frac{1}{4}$ | <input type="radio"/> $\frac{1}{5}$ |
|-------------------------------------|-------------------------------------|-------------------------------------|-------------------------------------|



c) Mihi had this chocolate bar. She ate the shaded piece.
What fraction of the chocolate was **left**? *(Select the correct answer)*

| | | | |
|-------------------------------------|-------------------------------------|-------------------------------------|-------------------------------------|
| <input type="radio"/> $\frac{1}{4}$ | <input type="radio"/> $\frac{4}{4}$ | <input type="radio"/> $\frac{1}{5}$ | <input type="radio"/> $\frac{4}{5}$ |
|-------------------------------------|-------------------------------------|-------------------------------------|-------------------------------------|