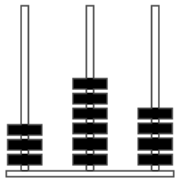


Abacus numbers

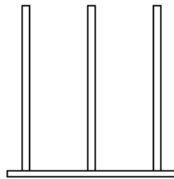
This task is about numbers on an abacus.



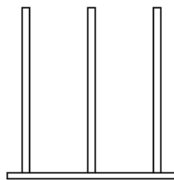
This abacus shows the number 364.

a) Show these numbers on each abacus.

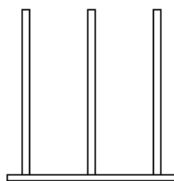
i) The number **6 3 0**



ii) The number **7 0 5**

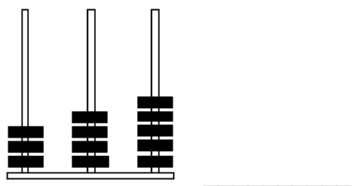


iii) The number **1 8 2**

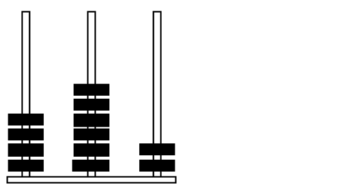


b) Write the numbers shown by each abacus.

i)



ii)



iii)

