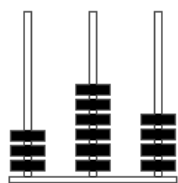


Abacus and place value

This task is about place value.



This abacus shows the number 364.

a) Name the place value and total value of the **6** in each number.

62

86

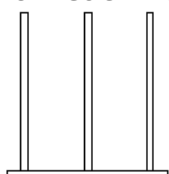
602

365

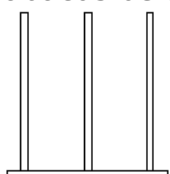
i) Place value

ii) Total value

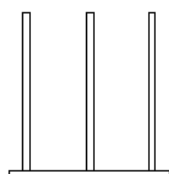
b) Show each number on an abacus below.



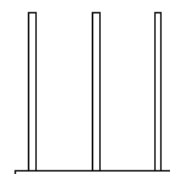
62



86



602



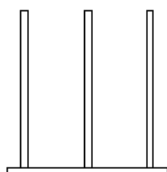
365

c) Write these numbers in order from **smallest** to **largest**: 716, 167, 671

_____ , _____ , _____

d) i) Write the **largest** 3-digit number you know. _____

ii) Show this number on the abacus.



e) i) Write the **smallest** 3-digit number you know. _____

ii) Show this number on the abacus.

