


A farmer's day


This task is about how to show time.

Show each of these times on the clock face and the digital clock. The times are written in **bold**.



a) A farmer has to get up at **half-past four** in the morning to milk his cows.



b) He starts milking at **ten past five**.



c) He finishes milking at **quarter to eight**.



d) The tanker comes to get the milk at **five minutes to nine**.

