



# The right time

This task is about telling the time correctly.




Five o'clock

a) Does the clock-face show the time written below it? *True/ False (Select one)*



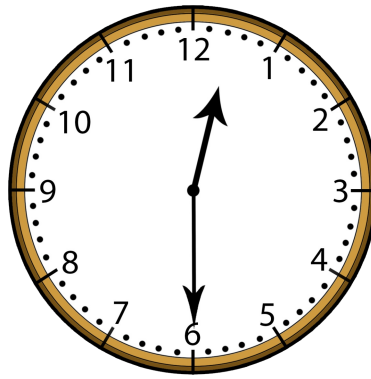
Quarter past nine

b) Does the clock-face show the time written below it? *True/ False (Select one)*




Half past seven

c) Does the clock-face show the time written below it? *True/ False (Select one)*



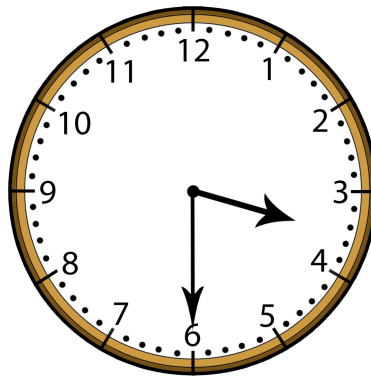
Six o'clock

d) Does the clock-face show the time written below it? *True / False (Select one)*




Quarter to eleven

e) Does the clock-face show the time written on it? *True / False (Select one)*




Half past four

f) Does the clock-face show the time written below it? *True / False (Select one)*




Two minutes past one

g) Does the clock-face show the time written below it? *True / False (Select one)*



Twenty to six

h) Does the clock-face show the time written below it? *True / False (Select one)*



Ten to twelve

i) Does the clock-face show the time written below it? *True / False (Select one)*

Published on *Assessment Resource Banks* (<https://arbs.nzcer.org.nz>)