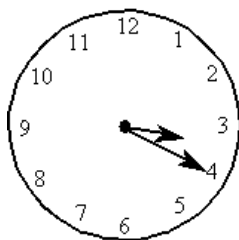


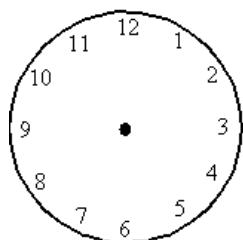
Show the time III

This task is about showing time.



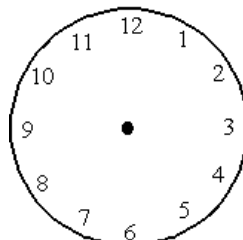
The clock above shows when Tim went fishing.

- a) What time did Tim go fishing? _____



Sarah went to sleep at half past seven.

- b) Draw hands on the clock face above to show the time Sarah went to sleep.



Joe went for a run at quarter to four.

- c) Draw hands on the clock face above to show the time Joe went for a run.

