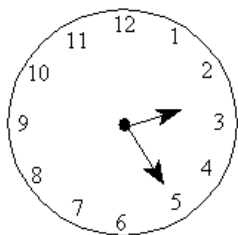


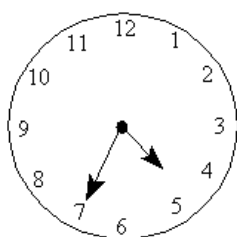
Show the time II

This task is about showing time.

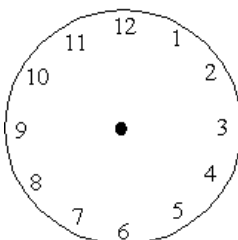
a) What time does the clock below show? _____



b) What time does the clock below show? _____



c) Joe went for a 20-minute bike ride. He left home at 10 minutes past 3. On the clock below draw the time Joe finished his bike ride.



d) Sarah went for a 55 minute swim. She started at 2:00 p.m. On the clock below draw the time Sarah finished her swim.

