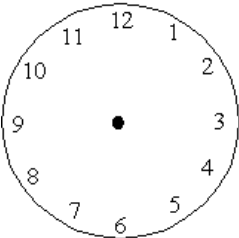


# Luka's day

This task is about telling the time.

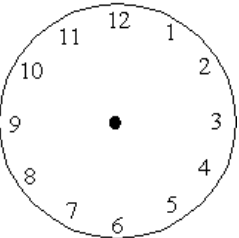
i)

a)



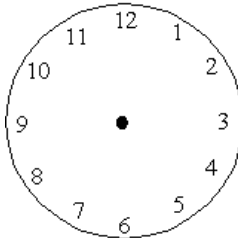
8 o'clock

ii)



8:20

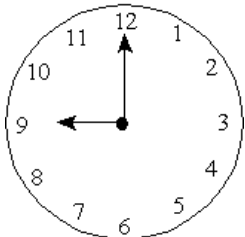
iii)



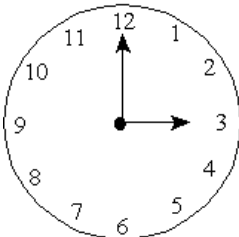
8:30

Luka got out of bed at 8 o'clock. He packed his bag at 8:20 a.m. and left for school at 8:30 a.m. Show each time on the clock faces above.

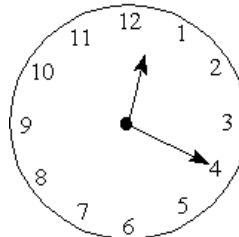
b) The bell at Luka's school rings at the times shown below:



1



2



3

Clock      What is the time?

- i)

Which clock shows lunch hour?

\_\_\_\_\_

\_\_\_\_\_
- ii)

Which clock shows home time?

\_\_\_\_\_

\_\_\_\_\_
- iii)

Which clock shows the beginning of the school day?

\_\_\_\_\_

\_\_\_\_\_