


# Cross country finishing times

**This task is about working out how long some students took to run a race.**


Five students ran a cross-country race that started at 1pm.  
Their finishing times are shown on clocks in hours, minutes and seconds.

The race began at 1 p.m. How long did it take Ruby to run the race in hours, minutes, and seconds?




a) Ruby:  hours,  minutes, and  seconds

The race began at 1 p.m. How long did it take Sofia to run the race in hours, minutes, and seconds?




b) Sofia:  hours,  minutes, and  seconds

The race began at 1 p.m. How long did it take Mia to run the race in hours, minutes, and seconds?




c) Mia:  hours,  minutes, and  seconds

The race began at 1 p.m. How long did it take Harry to run the race in hours, minutes, and seconds?



d) Harry:  hours,  minutes, and  seconds

The race began at 1 p.m. How long did it take Ella to run the race in hours, minutes, and seconds?



e) Ella:  hours,  minutes, and  seconds