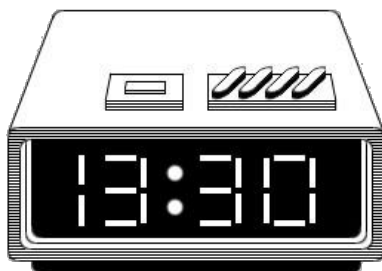



Telling time

This task is about different ways of telling the time.



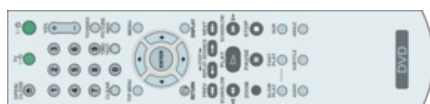
a) What is the time shown on the clock, in 12-hour time?

- | | | | | |
|--|--|--|--|--|
| <input type="radio"/> 13 minutes past 3 in the afternoon | <input type="radio"/> Half-past 3 in the afternoon | <input type="radio"/> 30 minutes past 13 | <input type="radio"/> Half-past 1 in the afternoon | <input type="radio"/> 33 minutes past 1 in the morning |
|--|--|--|--|--|



b) The TranzAlpine Express left Greymouth for Christchurch at 0810 hours. What time is this?

- | | | | | |
|--|--|--|--|--|
| <input type="radio"/> 10 to 8 in the evening | <input type="radio"/> 10 past 8 in the morning | <input type="radio"/> 8 minutes to 10 in the evening | <input type="radio"/> 1 minute past 8 in the evening | <input type="radio"/> 10 past 8 in the evening |
|--|--|--|--|--|



c) Tanya wanted to record her favourite TV programme which began at 7:35 p.m. What 24-hour time should she set on the video recorder?

- | | | | | |
|----------------------------|-----------------------------|-----------------------------|-----------------------------|-----------------------------|
| <input type="radio"/> 7:35 | <input type="radio"/> 17:35 | <input type="radio"/> 18:35 | <input type="radio"/> 19:35 | <input type="radio"/> 20:35 |
|----------------------------|-----------------------------|-----------------------------|-----------------------------|-----------------------------|



d) Jan's check-in time at the airport is 2250 hours. What is this in 12-hour time?

- | | | | | |
|---------------------------------|---|--|---|----------------------------------|
| <input type="radio"/> 2:25 p.m. | <input type="radio"/> 10 to 10 at night | <input type="radio"/> 5 past 10 at night | <input type="radio"/> 10 to 11 at night | <input type="radio"/> 12:50 a.m. |
|---------------------------------|---|--|---|----------------------------------|