

Analogue and digital clocks

This task is about showing times on analogue and digital clocks.

Below are the times Manaia did different things during her day. Draw what each time would look like on:

- . a round clock face, and
- . a digital clock face.

For example:

- Manaia woke up at half past seven.


i)



ii)

- a) Manaia had breakfast at eight o'clock.


i)



ii)

- b) Manaia started swimming at school at quarter past nine.


i)



ii)

c) Manaia got home from school at twenty minutes past three.


i)



ii)

d) Manaia had dinner at quarter to six.


i)



ii)

e) Manaia fed her cat at twenty five minutes to seven.

i)



ii)