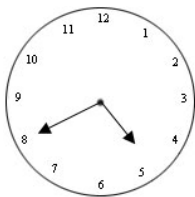


# Analogue and digital time

This task is about analogue and digital time.

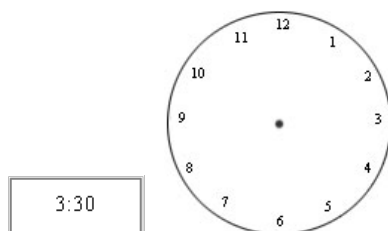


- a) Write the time the clock face above shows in digital form.  
Use the box for your answer.

- b) What time would this clock face show in 25 minutes?  
Show this in digital form in the box.

- c) When the clock face shows half-past four, what would the digital form be?

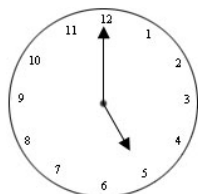
- d) Draw hands on this clock face to show the same time as the digital time in the box.



When the digital time shown in the box changes next, what time will be shown?  
Show the time in the blank box.

- e)

- f)



What time will this clock face show in 20 minutes? \_\_\_\_\_