
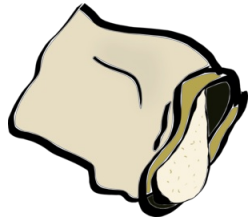



Changing weights

This task is about converting units between grams and kilograms.




a) A container which weighs 300 grams is filled with 1100 grams of flour.

What is the total weight of the filled container? kilograms



b) A bowl which weighs 475 grams is filled with 2.025 kilograms of pears.

What is the total weight of the full bowl and fruit? kilograms



c) A wheel of cheese weighing 2.25 kilograms has 120 grams cut from it.

How much does the block now weigh? kilograms



d) A jar of peanuts weighs 1.25 kilograms. The jar weighs 450 grams.

What is the weight of the peanuts? kilograms