




Different lengths

This task is about different units to measure length.

For each object, select if it is *less than 1 metre(m)* or *more than 1 metre(m)*. The first one has been done for you.

Object	Drawing	Answer
a) Length of a pencil		<i>less than 1 m</i> <i>more than 1 m</i>
b) Height of a door		<i>less than 1 m</i> <i>more than 1 m</i>
c) Length of a book		<i>more than 1 m</i> <i>less than 1 m</i>
d) Height of a dog		<i>more than 1 m</i> <i>less than 1 m</i>
e) Width of a bus		<i>less than 1 m</i> <i>more than 1 m</i>
f) Length of a dolphin		<i>less than 1 m</i> <i>more than 1 m</i>

Published on <https://newzealandcurriculum.tahurangi.education.govt.nz>