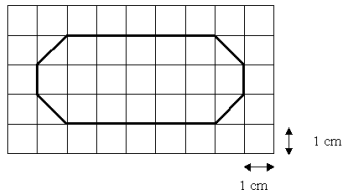


# Working out area

This task is about calculating area.



a) What is the **area** of the shape above?

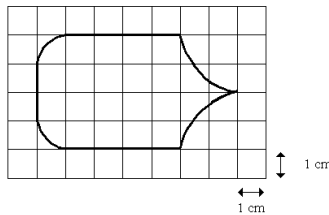
13 cm<sup>2</sup>

15 cm<sup>2</sup>

17 cm<sup>2</sup>

19 cm<sup>2</sup>

21 cm<sup>2</sup>



b) What is the approximate **area** of the shape above?

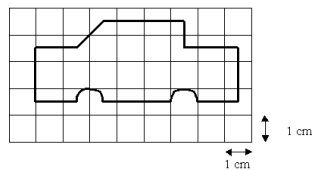
18 cm<sup>2</sup>

20 cm<sup>2</sup>

22 cm<sup>2</sup>

24 cm<sup>2</sup>

26 cm<sup>2</sup>



c) What is the approximate **area** of the shape above?

15 cm<sup>2</sup>

18 cm<sup>2</sup>

21 cm<sup>2</sup>

24 cm<sup>2</sup>

27 cm<sup>2</sup>