


Rectangular area

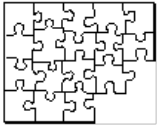
This task is about the area of shapes.

Find the area of each shape.



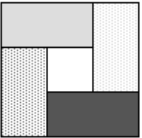
Each square on the flag has an area of 1 cm^2 .

What is the total area of the flag? cm^2



Each piece of the jigsaw has an area of 1 cm^2 .

What is the total area of jigsaw that has been made? cm^2



The small square in the middle of this shape has an area of 1 cm^2 .

What is the total area of the shape? cm^2



Each of the stripes on the flag has an area of 10 cm^2 .

What is the total area of the flag? cm^2



Each of the longest stripes on this flag has an area of 10 cm^2 .

What is the total area of the flag? cm^2