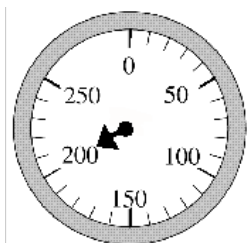


Reading scales

This task is about reading scales.

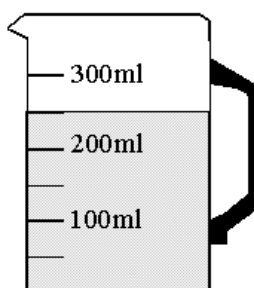
Jess is baking a cake.

a) She turns the oven on.



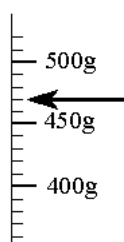
What temperature does Jessica turn the oven to? °C

b) Jess pours some milk into a jug.



How much milk is in the jug? ml

c) Jess weighs the flour on the scales.



What does the flour weigh? g

Published on Assessment Resource Banks (<https://arbs.nzcer.org.nz>)