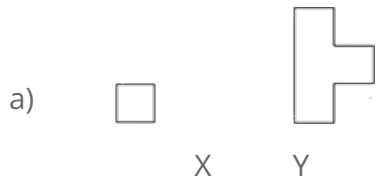


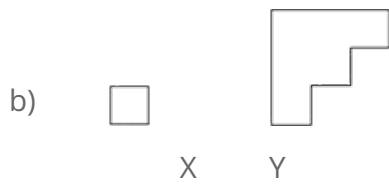
How many Xs cover Y

This task is about unit square area.

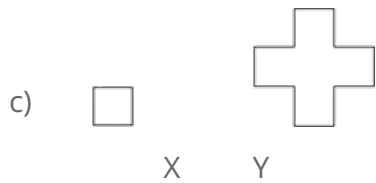
For the following questions, write down how many of the small squares, X, you would need to cover each shape, Y.



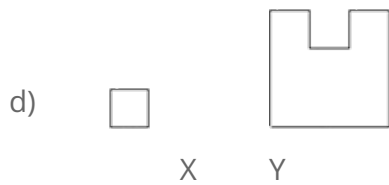
Answer:



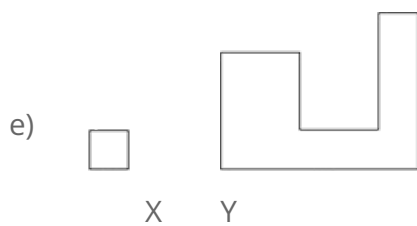
Answer:



Answer:



Answer:



Answer: