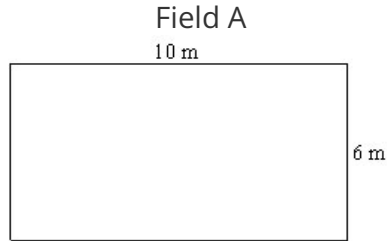


Fencing the field

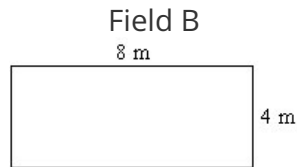
This task is about working out the perimeter of shapes.

A farmer has four fields to fence. Each field is shown with its size. Fields A and B are rectangles.

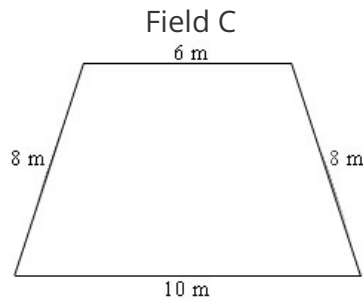
Work out how many metres of fencing are needed for each field.



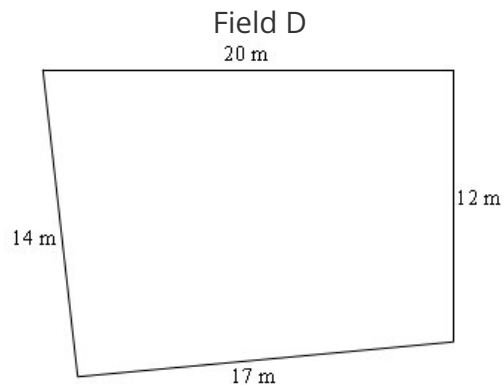
How many metres of fencing are needed for this field? metres



How many metres of fencing are needed for this field? metres



How many metres of fencing are needed for this field? metres



How many metres of fencing are needed for this field? metres