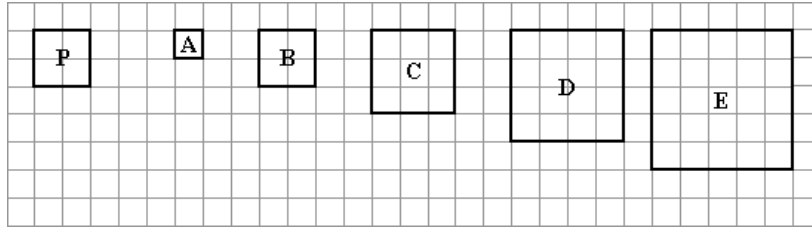


Predicting resizing

This task is about resizing and scale factors.



a) If Shape P was transformed with an enlargement scale factor of $1\frac{1}{2}$, it would become ...

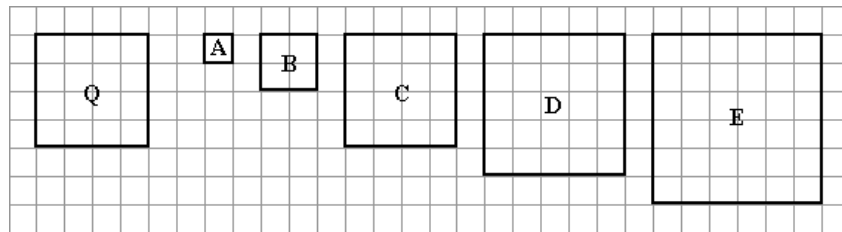
shape A

shape B

shape C

shape D

shape E



b) If shape Q was transformed with an enlargement scale factor of $\frac{1}{2}$, it would become ...

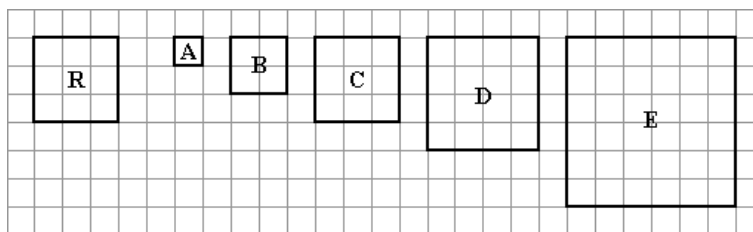
shape A

shape B

shape C

shape D

shape E



c) If Shape R was transformed with an enlargement scale factor of $\frac{1}{3}$, it would become ...

shape A

shape B

shape C

shape D

shape E