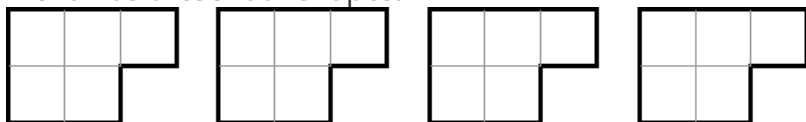


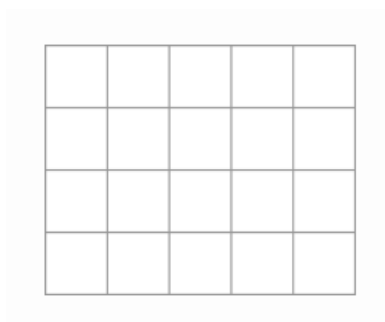
Fitting together

This task is about how 2-D shapes fit together.

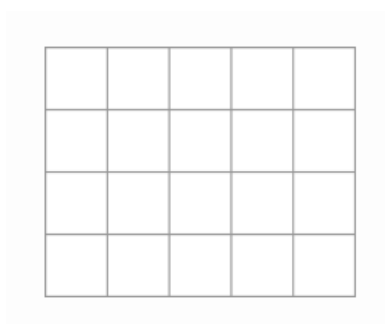
Nisha has these four shapes.



a) Draw how she could fit **all four** shapes on the grid below.



b) Draw a **different** way that she could fit the four shapes on the grid.



c) Draw **another** way that she could fit all four shapes on the grid

