
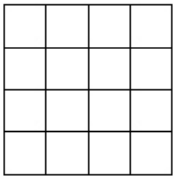
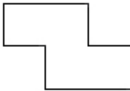


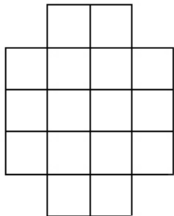
Tessellating patterns II

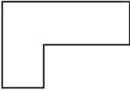
This task is about tessellating shapes.

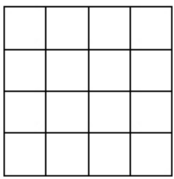
- a) Draw four  on the grid, so that the whole grid is covered.




- b) Draw four  on the grid, so that the whole grid is covered.



- c) Draw four  on the grid, so that the whole grid is covered.



- d) Draw four  on the grid, so that the grid is covered **differently** from c).

