


# Which way?

**This task is about clockwise and anticlockwise directions.**

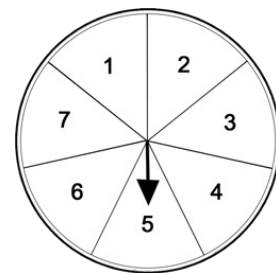
Look at the clock shapes and answer the questions.

- a) i) The arrow is pointing at the lolly.  
If you turn the arrow 3 spaces clockwise,  
what picture will it be pointing at?  
(Select one)



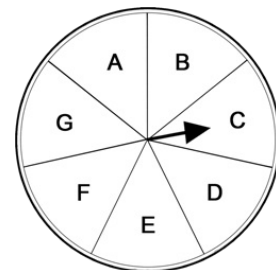
*apple | egg | lemonade | banana | carrot | lolly | ice cream*

- ii) The arrow is pointing at the number 5.  
If you turn the arrow 2 spaces anticlockwise,  
what number will it be pointing at?  
(Select one)





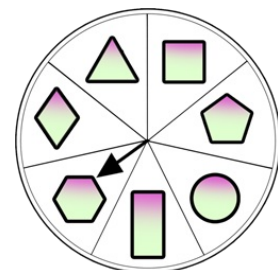
*1 | 2 | 3 | 4 | 5 | 6 | 7*

- iii) The arrow is pointing at the letter C.  
If you turn the arrow 4 spaces clockwise,  
what letter will it be pointing at?  
(Select one)



*E | F | G | A | B | C | D*

- b) The arrow is pointing at the   
and you want it to point to the   
How many spaces and which way you would  
turn the arrow to do this?



How many spaces?

Which way? (Select one) *clockwise | anticlockwise*