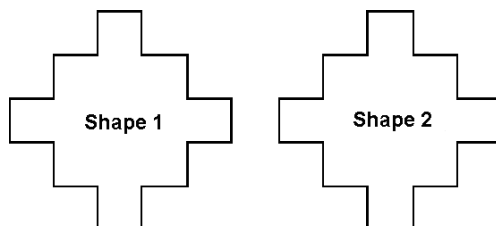


Transformation or not?

This task is about transformations.

Select "Yes" or "No" to show if each transformation could have been used to transform Shape 1 to Shape 2.

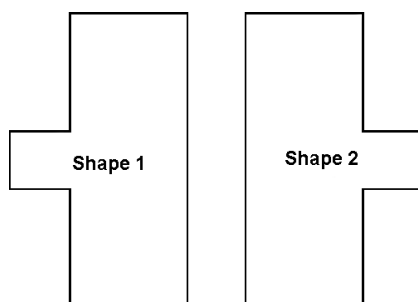


a) Could the transformations below be used to transform Shape 1 to Shape 2? *(Select Yes or No)*

i) Rotation *Yes/ No*

ii) Reflection *Yes/ No*


iii) Translation *Yes/ No*



b) Could the transformations below be used to transform Shape 1 to Shape 2? *(Select Yes or No)*

i) Rotation *Yes/ No*

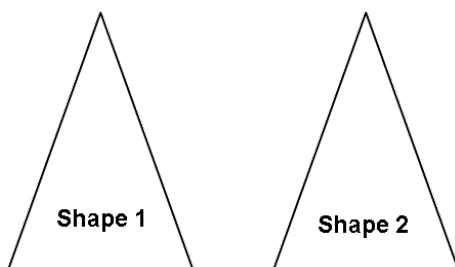
ii) Reflection *Yes/ No*



c) Could the transformations below be used to transform Shape 1 to Shape 2? *(Select Yes or No)*

i) Rotation *Yes/ No*

ii) Reflection *Yes/ No*



d) Could the transformations below be used to transform Shape 1 to Shape 2? *(Select Yes or No)*

i) Rotation *Yes/ No*

ii) Reflection *Yes/ No*

iii) Translation *Yes/ No*