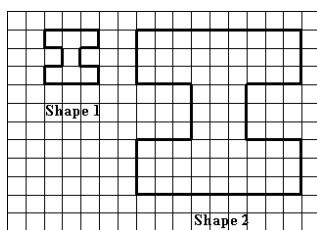


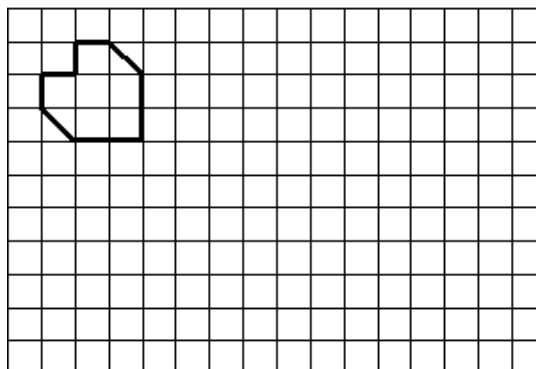
More scale factor enlargements

This task is about enlarging shapes with scale factors.

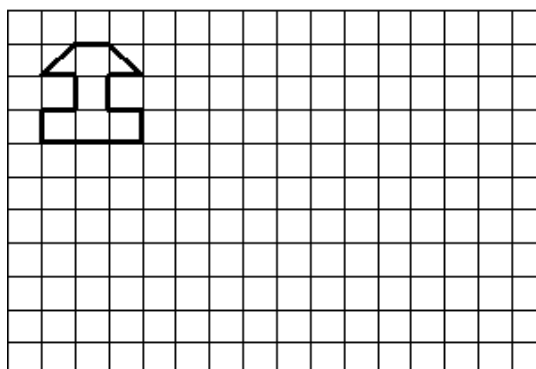


Shape 1 has been enlarged **three** times to make Shape 2.

a) Enlarge this shape **two** times.



b) Enlarge this shape **two** times.



c) Enlarge this shape **four** times.

